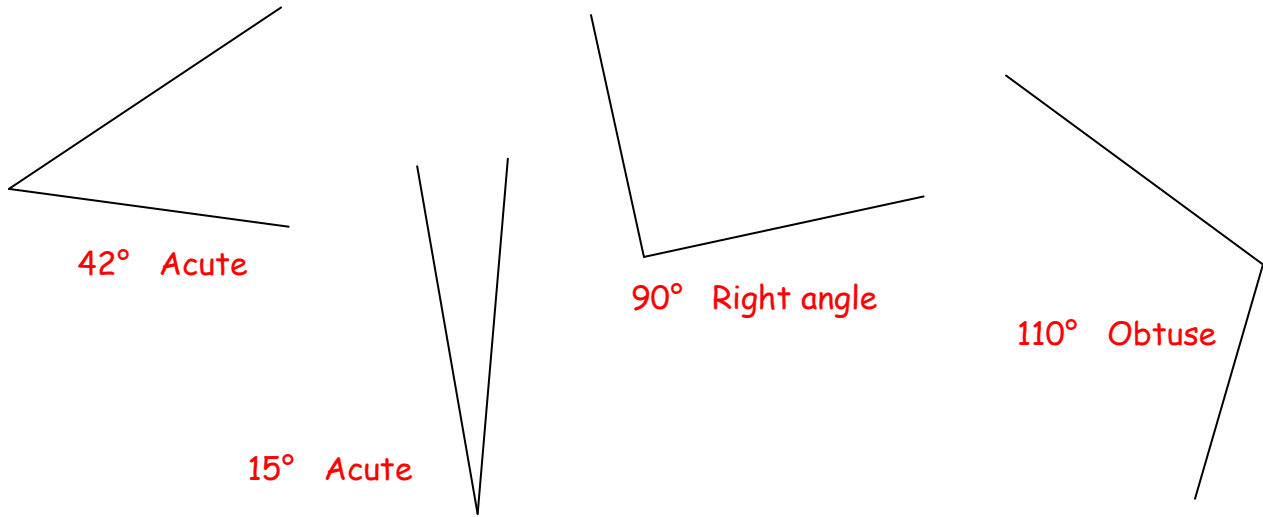


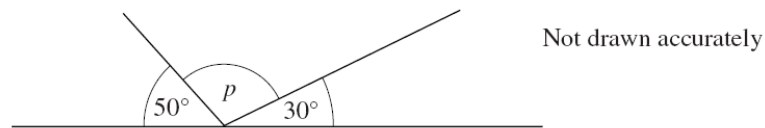
Angles

Estimate the size of the following angles then measure them using a protractor. Are they acute, obtuse, reflex or right angles?



18 Work out the size of each missing angle in the diagrams below.

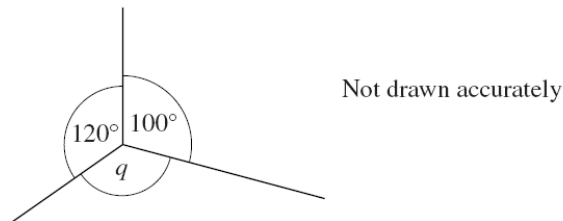
(a)



$$p = 180 - 50 - 30$$

Answer $p = 100^\circ$ degrees (1 mark)

(b)



$$q = 360 - 120 - 100$$

Answer $q = 140^\circ$ degrees (2 marks)